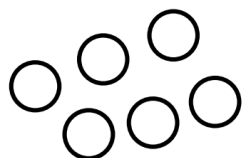
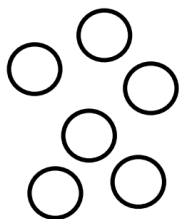


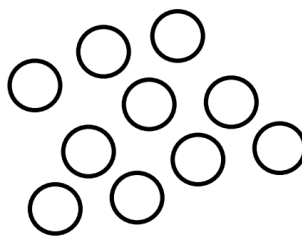
2. Shade in the fraction of counters indicated.



a) $\frac{1}{2}$



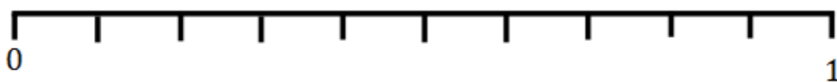
b) $\frac{1}{3}$




c) $\frac{1}{5}$

8. Place the following fractions on the number line

$\frac{1}{2}$, $\frac{2}{5}$, $\frac{1}{10}$, $\frac{1}{20}$




9. a) Shade $\frac{1}{3}$ of this shape




b) Shade $\frac{2}{6}$ of this shape



c) Shade $\frac{2}{3}$ of this shape



d) Shade $\frac{1}{3}$ of this shape



10. a) Fill in the missing numbers so that each fraction is equivalent to $\frac{1}{2}$.

$$\frac{\quad}{4}, \frac{4}{\quad}, \frac{\quad}{6}, \frac{8}{\quad}$$

b) Fill in the missing numbers so that each fraction is equivalent to $\frac{1}{3}$.

$$\frac{\quad}{6}, \frac{3}{\quad}, \frac{\quad}{12}, \frac{6}{\quad}$$